






Level 1

For office use only														
A1	Individual questionnaire number							A2	Household questionnaire number					
A3	Household control sheet number							A4	Pcode from household roster					

1.  +  = 

- a) 
- b) 
- c) 
- d) 

2. $12 \div 3 =$

- a) 2
b) 3
c) 4
d) 5

3. $4 \times 7 =$

- a) 4
b) 7
c) 18
d) 28

4. If you count by 2 which number should go next ? / Fa o bala dilo ka bobedi le bobedi go tshwanetse ga latela palo efe fano?

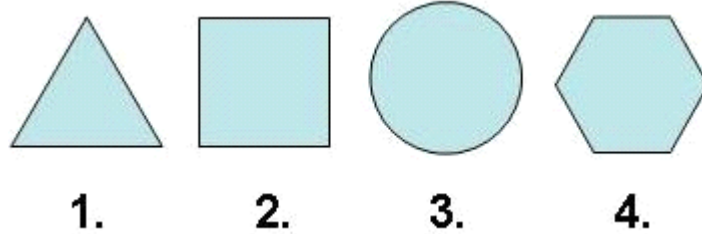
2 4 6 8 10 ?

- a) 10
b) 11
c) 12
d) 13

5. $16 \div 8 = 2$

- a) +
- b) -
- c) x
- d) \div

6. Which shape is the odd one out? / Ke sebopego sefe se se senang sengwe se tse dingwe di nang le sone?



- a) 1.
- b) 2.
- c) 3.
- d) 4.

7. Which item is the cheapest? / Ke selo sefe se se tlhwatlhwa-tlase go di gaisa tsotlhe?



a) R1.80



b) R2.00



c) 0.90c



d) R5.00

8. What time is on the clock? / Ke nako mang mo tshupanakong eno?




- a) 2
- b) 2:30
- c) 3
- d) 3:30

9. $1\text{cm} = ?$

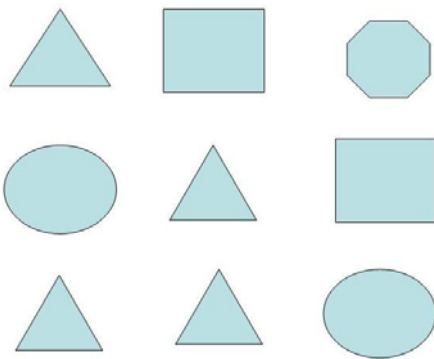
- a) 10 mm
- b) 100 mm
- c) 1000 mm
- d) 10000 mm

10. How many squares are shaded? / Ke disekwere di le kae tse di fifaditsweng?




- a) 2 out of 16
- b) 3 out of 16
- c) 4 out of 16
- d) 5 out of 16

11. How many triangles are in this figure? / Go na le dikhutlotharo di le kae mo setshwantshong seno?




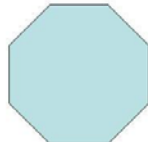
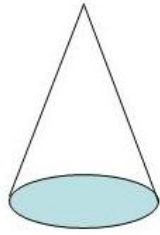
- a) 2
- b) 3
- c) 4
- d) 5

12. How many sides does this object have? / Selo seno se na le matlhakore a le kae?



- a) 4
- b) 5
- c) 6
- d) 7

13. Which shape makes base of the cone? / Ke sebopego sefe se se bopang marago a khouno?



a)

b)

c)

d)

14. Which city had the hottest temperature? / Ke toropo efe e e neng e na le thempheretšha e e mogote go di feta tsotlhe?

City / Toropo	Temperature / Thempheretšha ° C
Cape Town/Motse-Kapa	25
Johannesburg/Gauteng	24
Harare	20
Nairobi	22

- a) Cape Town/Motse-Kapa
- b) Johannesburg/Gauteng
- c) Harare
- d) Nairobi

15. How many of these numbers are greater than 6? / Ke dife tsa dipalo tseno tse dikgolo go feta 6?

2, 4, 6, 3, 8, 1, 11, 12

- a) 3
- b) 4
- c) 6
- d) 7